

1. [+ Whole Numbers to 10]

Skill 1.1 Adding whole numbers from 1 to 10 by counting on.

MM3.2 11 22 33 44
MM4.1 11 22 33 44


- Start with the largest number.
- Count on the smaller number.

Q.


	9	2	4	1	7	6	3	10	8	5
+ 3										

A.

	9	2	4	1	7	6	3	10	8	5
+ 3	12	5	7	4	10	9	6	13	11	8



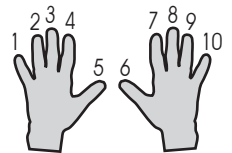
OR



9 + 3 = ? Start with the largest number 9.
Count on 3 more.
9 + 3 = ?

a)

	8	6	5	3	2	7	9	1	4	10
+ 2	10									



b)

	3	7	1	10	6	8	4	5	9	2
+ 6										

c)

	2	8	7	1	10	3	6	5	4	9
+ 5										

d)

	2	9	3	7	10	1	4	6	8	5
+ 8										

Skill 1.2 Adding whole numbers from 1 to 10 using a number line.

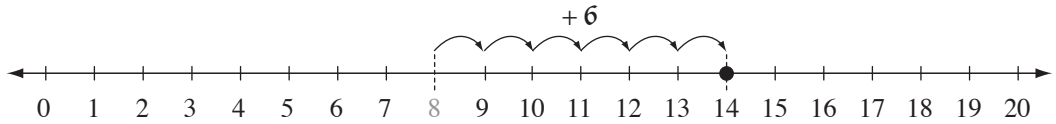
MM3.2 11 22 33 44
MM4.1 11 22 33 44

Q.

	8	4	10	2	7	5	3	1	9	6
+6										

A.

	8	4	10	2	7	5	3	1	9	6
+6	14	10	16	8	13	11	9	7	15	12



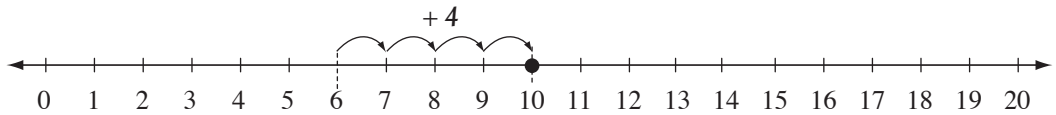
$8 + 6 = ?$

Start at 8. Go forward 6 places. You are at 14.

$8 + 6 = 14$

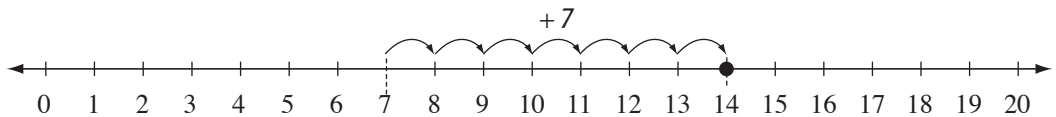
a)

	6	5	2	8	3	4	1	7	10	9
+4	10									



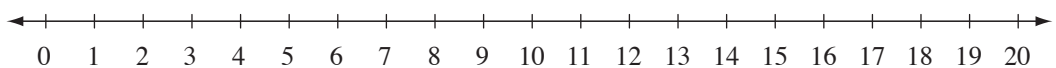
b)

	7	6	2	8	10	1	5	4	9	3
+7										



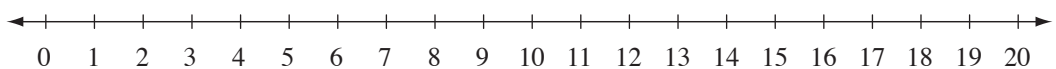
c)

	5	7	10	9	1	8	3	4	2	6
+8										



d)

	9	11	4	12	7	5	10	8	3	6
+3										



Skill 1.3 Adding 7, 8 or 9 by making 10.

MM3.2 11 22 33 44
MM4.1 11 22 33 44

- Find the largest number.
- Work out what number you need to add to the largest number, to make 10.
- Break down the smaller number to include the number you need.
- Regroup the numbers to create a sum of 10. (10's are easy!)

Q.

	8	6	2	7	10	1	5	4	9	3
+7										

A.

	8	6	2	7	10	1	5	4	9	3
+7	15	13	9	14	17	8	12	11	16	10

8 + 7 = ? 8 is the largest number.

Ask: 'What number added to 8, will make 10?'

Answer: 8 + ? = 10

8 + 2 = 10 You need a 2

Break down the smaller number 7, into 2 and 5.

2 + 5 = 7

Regroup the 2 with the 8 to make 10.

$$8 + 7 = 8 + (2 + 5)$$

$$= (8 + 2) + 5$$

$$= 10 + 5$$

$$= 15$$

a)

	4	9	2	10	8	3	6	1	7	5
+9	13	18								

$$4 + 9 = 3 + 1 + 9$$

$$= 3 + 1 + 9$$

$$= 3 + 10$$

$$= 13$$

Hint: When you add 9 the unit in the answer is always one less than the unit in the question!

b)

	7	6	2	8	10	1	5	4	9	3
+8	15	14								

c)

	9	11	4	12	7	5	10	8	3	6
+7	16									

Q.

	5	7	9	1	8	6	3	10	2	4
+8										

A.

	5	7	9	1	8	6	3	10	2	4
+8	13	15	17	9	16	14	11	18	10	12

+	1	2	3	4	5	6	7	8	9	10
1	2	3	4	5	6	7	8	9	10	11
2	3	4	5	6	7	8	9	10	11	12
3	4	5	6	7	8	9	10	11	12	13
4	5	6	7	8	9	10	11	12	13	14
5	6	7	8	9	10	11	12	13	14	15
6	7	8	9	10	11	12	13	14	15	16
7	8	9	10	11	12	13	14	15	16	17
8	9	10	11	12	13	14	15	16	17	18
9	10	11	12	13	14	15	16	17	18	19
10	11	12	13	14	15	16	17	18	19	20

$5 + 8 = ?$

Move down the column from 5.

Move across the row from 8.

The number crossed is the result.

$5 + 8 = 13$

$8 + 5 = 13$

a)

	4	10	2	3	5	7	9	1	8	6
+5	9	15								

b)

	7	8	2	1	5	10	4	3	9	6
+4	11	12								

c)

	1	6	4	8	2	9	5	10	3	7
+9	10									

d)

	2	9	7	3	10	8	4	6	1	5
+2	4									